

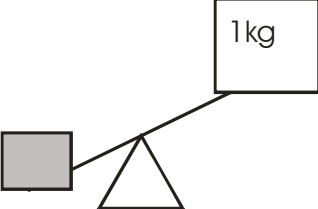



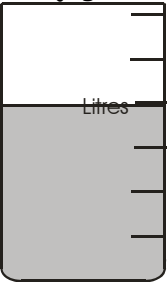


Assessment Activities Level 2

Learning intention.	A Date	B Date
I am learning how big one metre is.	20) Name an object that is about 1 metre long.	20) Name an object that is about one metre long.
I am learning to measure objects to the nearest metre.	21) According to the ruler about how long is this line? 	21) According to the ruler about how long is this line? 
I am learning how heavy a 1 kilogram weight is.	22) What might weigh about 1 kg?	22) What might weigh about 1kg?
I am learning to estimate and then check by weighing whether an object is lighter or heavier than 1 kg.	23) Is the grey box heavier than 1 kilogram? 	23) Is the grey box heavier than 1 kg? 
I am learning to measure an object to the nearest kilogram.	24) To the nearest kg, how heavy is the ball? 	24) To the nearest kg, how heavy is the ball? 
I am learning what a litre is.	25) Name a liquid you buy in litres.	25) Name a liquid you buy in litres.
I am learning to estimate volume to the nearest litre	26) How many litres of water are in the jug? 	26) How many litres of water are in the jug? 